

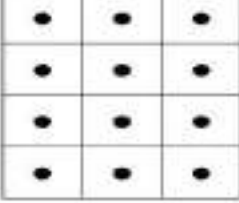

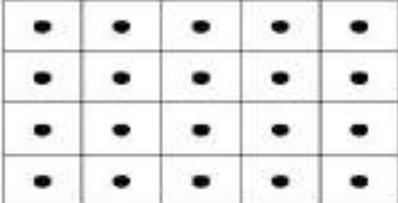
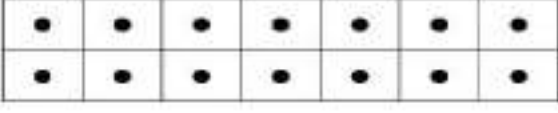


ADI SOYADI:

## ÇARPMA VE BÖLME İŞLEMLERİNİ YAPALIM

	$2 \times 5 = 10$ $5 \times 2 = 10$	$10 \div 2 = 5$ $10 \div 5 = 2$
	___ x ___ = ___ ___ x ___ = ___	___ ÷ ___ = ___ ___ ÷ ___ = ___
	___ x ___ = ___ ___ x ___ = ___	___ ÷ ___ = ___ ___ ÷ ___ = ___
	___ x ___ = ___ ___ x ___ = ___	___ ÷ ___ = ___ ___ ÷ ___ = ___
	___ x ___ = ___ ___ x ___ = ___	___ ÷ ___ = ___ ___ ÷ ___ = ___
	___ x ___ = ___ ___ x ___ = ___	___ ÷ ___ = ___ ___ ÷ ___ = ___

Sayıları örnekteği gibi yazalım

$23 = \underline{20} + \underline{3}$	$55 = \underline{\quad} + \underline{\quad}$
$17 = \underline{\quad} + \underline{\quad}$	$89 = \underline{\quad} + \underline{\quad}$
$96 = \underline{\quad} + \underline{\quad}$	$42 = \underline{\quad} + \underline{\quad}$
$74 = \underline{\quad} + \underline{\quad}$	$68 = \underline{\quad} + \underline{\quad}$
$31 = \underline{\quad} + \underline{\quad}$	$26 = \underline{\quad} + \underline{\quad}$
___ = 10 + 2	___ = 20 + 4
___ = 40 + 8	___ = 70 + 3
___ = 90 + 1	___ = 30 + 7
___ = 50 + 6	___ = 60 + 9

Sayıları en yakın onluğu yuvarlayalım

34	65	87	30	70	90
12	94	25			
55	19	83			
76	67	37			
91	48	82			